



VASHISTH VATSALYA PUBLIC SCHOOL

An English Medium Co-Educational School
PRAYAGRAJ

Elgin Road Civil Lines Prayagraj

Mob.: 9598050238

HOME ASSIGNMENT 2024-25

CLASS- II

ENGLISH

Dear students learn and write this assignment three times in your assignment copy. Parents are requested to guide and motivate their wards to do their homework at least two times in a week.

Q1- Write a special name for these:

- | | |
|---------------|---------------|
| 1. A teacher | 6. A day |
| 2. A mountain | 7. A festival |
| 3. A river | 8. A Friend |
| 4. A month | 9. A country |
| 5. A city | 10. A state |

Q2. Fill in the blanks:

1. My name is _____.
2. My best friend's name is _____.
3. The name of my school is _____.
4. The name of my city is _____.
5. The name of my country is _____.

Q3. Write the many words using 's' or 'es'-

- | | |
|-----------|------------|
| 1. Pencil | 6. Brush |
| 2. Fox | 7. Watch |
| 3. Dish | 8. Bus |
| 4. Toy | 9. Hut |
| 5. Potato | 10. Window |



VASHISTH VATSALYA PUBLIC SCHOOL

An English Medium Co-Educational School
PRAYAGRAJ

Elgin Road Civil Lines Prayagraj

Mob.: 9598050238

Q4-Arrange the following words in their own group-

Girl, Butter, Cat, Table, Nurse, Brother, Hut, Dove, Tiger, School, Delhi, Chair, Potato, City, Wolf, Library, Box, Anu, Pigeon, Arav, India, Tailor, Blanket

Person-

Animal-

Places-

Things-

Q5- Learn the spellings and write Word Meaning-

- | | | | |
|------------|----------------|-----------------------|---------------|
| 1. Decide | 6. countryside | 11. remember | 16. Scared |
| 2. Pretty | 7. Hopping | 12. Town | 17. Beautiful |
| 3. Shone | 8. Swoop | 13. arms outstretched | 18. Swayed |
| 4. Breeze | 9. Cages | 14. Hatchling | 19. Grumbled |
| 5. Potions | 10. Curiously | 15. twigs | |

Q6. Learn and write the correct verbs:

1. I _____ home on my bicycle.
2. Sheela _____ a glass of juice every day.
3. Cheetahs _____ very fast.
4. I _____ my shoes every day.
5. Manav _____ the guitar beautifully.

Q7. Rearrange the words to make sentences:

1. the a sky bird in flies
2. horse has a four legs
3. picnic for a went i
4. holiday is tomorrow a
5. happy Kavya very is



VASHISTH VATSALYA PUBLIC SCHOOL

An English Medium Co-Educational School
PRAYAGRAJ

Elgin Road Civil Lines Prayagraj

Mob.: 9598050238

Q8. Rearrange these letters to make words:

- | | | | |
|-----------|------------|----------|-----------|
| 1. plma | 2. Ugj | 3. Naesk | 4. Licnep |
| 6. ondkye | 3. Kobo | 4. Hsif | 6. Tah |
| 9. lycec | 10. Odctro | 11. Udkc | 12. Leotw |

Q9. Number each sets of words in alphabetical order:

- | | | |
|-----------|------------|-----------|
| 1. Chair | 2. Abu | 3. Shorts |
| Desk | Dora | Mundu |
| Bed | Fali | Jeans |
| Stool | Jaspal | Skirt |
| Table | Mala | Cap |
| 4. Cherry | 5. Lucknow | |
| Pear | Chennai | |
| Banana | Ambala | |
| Grapes | Mumbai | |
| Apple | Dibrugarh | |

Q10. Paste the pictures of any six things you see in your house and name them.

Q11. Fill in the blanks with 'is', 'am' or 'are':

1. I _____ happy.
2. Cubs _____ baby lions.
3. We _____ friends.
4. The birds _____ flying.
5. A rose _____ a pretty flower.
6. My name _____ Dolma.
7. I _____ from Tibet.
8. My best friends _____ Jas and Ami.



VASHISTH VATSALYA PUBLIC SCHOOL

An English Medium Co-Educational School
PRAYAGRAJ

Elgin Road Civil Lines Prayagraj

Mob.: 9598050238

9. We _____ seven years old.

10. We _____ in the same class.

Q12. Fill in the blanks with 'has' or 'have':

1. Shoma _____ curly hair.
2. Joe _____ a blue shirt.
3. Rats _____ four legs.
4. I _____ colour pencils.
5. Gopa _____ a sweet voice.

Q13. Match the following:

Column A

1. water, tea, milk, juice
2. potato, cabbage, carrot, brinjal
3. table, stool, sofa, bed
4. zebra, bear, giraffe, kangaroo
5. sari, shorts, jeans, kurta
6. lotus, daisy, rose, sunflower
7. Prayagraj, Delhi, Lucknow, Agra
8. apple, banana, mango, grapes
9. carrom, ludo, basketball, football
10. India, America, China, Japan

Column B

- a. vegetables
- b. drinks
- c. animals
- d. clothes
- e. furniture
- f. fruits
- g. country
- h. flowers
- i. cities
- j. games

Q14. Learn the spellings and write make sentences:

- | | | |
|--------------|--------------|-----------------------|
| 1. scared | 9. pretty. | 17. decide |
| 2. cage | 10. swayed. | 18. arms Outstretched |
| 3. beautiful | 11. special. | 19. potion |
| 4. curiously | 12. magical. | |
| 5. shone | 13. swoop | |
| 6. magical | 14. hopping | |



VASHISTH VATSALYA PUBLIC SCHOOL

An English Medium Co-Educational School
PRAYAGRAJ

Elgin Road Civil Lines Prayagraj

Mob.: 9598050238

7.special

15. grumbled

8.balcony

16. remember

Q15. Learn and write who said these words to whom:

1. "Yes I promise you want a pet as a birthday gift."
2. "We are proud of you".
3. "What a pretty nest they have!"
4. "How wonderful to see them after such a long time!"
5. "Wow! The moon is in our garden now."
6. "Stop it!"
7. "Which pet do you choose?"
8. "The moon is very, very far from us."
9. "Let us think how we can do that."
10. "Hurray! Thank you for a wonderful gift."
11. "You said you want a pet as your birthday gift."
12. "Grandma, look at the moon!"

Q16. Learn and write answer of following questions-

1. Which animal Rohan choose as a pet?
2. What did Rohan want as a birthday gift?
3. What do Shivi and Kavi wish?
4. What did Grandma do to bring the moon?
5. Who can save all the oceans, trees, mountains, rivers, birds and bees?
6. How old Rohan is going to be?
7. Where did the sparrows go?
8. Who can fly in the sky?
9. In what way could Nisha help the sparrows?
10. What did Nisha see in her balcony?
11. Who are Shivi and Kavi?
12. Why do stars twinkle?



VASHISTH VATSALYA PUBLIC SCHOOL

An English Medium Co-Educational School
PRAYAGRAJ

Elgin Road Civil Lines Prayagraj

Mob.: 9598050238

13. Who has special powers like extralong legs?
14. How did Nisha's father feel when he saw the sparrows?
15. Which place did the birds choose to make a nest?
16. Where did Rohan's parents take him?
17. Which animals and birds were suggested as a pet to Rohan by his parents?
18. What is the name of the puppy?
19. What is the name of parrot?
20. Where do Shivi and Kavi live?
21. Who helped the two sisters to bring the moon to their garden?
22. Who was the first human to land on the moon?
23. How superhero helps the poor?
24. What was the nest of the sparrows made of?
25. What is the young one of the sparrow is called?

Q17. Learn and write 10 sentences on 'My Country - India'.

Q18. Learn and write the poem, 'If I was a Superhero'.

Q19. Learn the spellings and write 3 times each word:

Birthday	Choose	Scared	Puppy	Promise
Cages	Little	Remember	Town	Garden
Sundarpur	Family	Beautiful	Racing	Special
Hungry	Potion	Bowl	Feed	Cleaning
Grumbled	Balcony	Countryside	Swoop	Crumbs
Decide	Kitten	Pretty	Swimming	Garden
Swayed	Breeze	Twinkling	Bright	Sister
Grandma	Jumped	Smiled	Curiously	Laughed



VASHISTH VATSALYA PUBLIC SCHOOL

An English Medium Co-Educational School
PRAYAGRAJ

Elgin Road Civil Lines Prayagraj

Mob.: 9598050238

HOME ASSIGNMENT 2024-25

CLASS- II

SUBJECT-HINDI

(नोट- सम्पूर्ण प्रश्न पत्र अपनी अभ्यास-पुस्तिका (कॉपी) में याद करके तीन बार लिखें)

1. निम्न शब्दों को शुद्ध करके लिखें -

रितु, लच्छन, पृथ्वी,
नास, मिरतु, पच्छी

2. संज्ञा शब्दों पर गोला लगाइए और इन्हें रिक्त स्थान में लिखें -

- (क) आम में मिठास है। -----
(ख) सोनी तस्वीर बना रही है।-----
(ग) रोहित खेल रहा है।-----
(घ) रीमा पढ़ रही है।-----
(ङ) ताजमहल आगरा में है।-----

3. खाली स्थान भरिए-

- (क) मैं----- विद्यालय में पढ़ता हूँ।
(ख) मैं-----शहर के मोहल्ले में रहता हूँ।
(ग) मेरी माताजी----- है।
(घ) मेरे पिताजी----- है।



VASHISTH VATSALYA PUBLIC SCHOOL

An English Medium Co-Educational School
PRAYAGRAJ

Elgin Road Civil Lines Prayagraj

Mob.: 9598050238

4. निम्नलिखित रिक्त स्थानों की पूर्ति करें-

- (क) एक लेखक कहानी लिखते समय भाषा का _____ रूप प्रयोग करता है।
- (ख) अध्यापिका आपको बोलकर पढ़ रही हों तब भाषा के _____ रूप का प्रयोग होता है।
- (ग) किसी के कान में कुछ कहना भाषा का _____ रूप है।
- (घ) जब टेलीफोन पर बात करते हैं तो भाषा के _____ रूप में करते हैं।
- (ङ) बोलकर विचारों का आदान-प्रदान करने वाली भाषा _____ कहलाती है।
- (च) संकेत का प्रयोग करके विचारों या भावों को प्रकट करने वाली भाषा _____ कहलाती है।
- (छ) भारत की राष्ट्रभाषा _____ है।
- (ज) गुजरात में _____ भाषा बोली जाती है।
- (झ) एक या एक से अधिक वर्णों के समूह को _____ कहते हैं।
- (ञ) अर्थ के आधार पर शब्दों को _____ भागों में बाँटा गया है।
- (ट) संज्ञा के स्थान पर आने वाले शब्द को _____ कहते हैं।
- (ठ) सही अर्थ देने वाले शब्दों को _____ शब्द कहते हैं।
- (ड) वह बस से विद्यालय जाता है इस वाक्य में सर्वनाम _____ है।

5. वर्णों को सही क्रम में लिखकर शब्द बनाइए----

तखब,	छमली,	नीपा,
कालड़,	लफू,	तापीप,



VASHISTH VATSALYA PUBLIC SCHOOL

An English Medium Co-Educational School
PRAYAGRAJ

Elgin Road Civil Lines Prayagraj

Mob.: 9598050238

6. वर्णों को सही क्रम में लिखकर शब्द बनाइए-

छमली,	ताबकी,	तखब,
कालड़,	नीपा,	लफू

7. समझिए और नाम का मिलान कीजिए-

(क) देश का नाम	पुस्तक
(ख) राज्य का नाम	भारत
(ग) शहर का नाम	गाय
(घ) वस्तु का नाम	आगरा
(ङ) पशु का नाम	पंजाब

8. निम्नलिखित वर्ण और व्यंजनों को मिलाकर लिखें-

(क) न् + अ + ल् + अ
(ख) त् + आ + ल् + आ
(ग) ह् + इ + र् + अ + ण् + अ
(घ) घ् + ओ + इ + आ
(ङ) औ + र् + अ + त्

9. निम्नलिखित शब्दों के विलोम शब्द लिखें -

नीचे,	जाना,	पास,
पक्का,	उतरी,	आकर,
रात,	मोटा,	काला,
रोना,	उठाना,	जल्दी



VASHISTH VATSALYA PUBLIC SCHOOL

An English Medium Co-Educational School
PRAYAGRAJ

Elgin Road Civil Lines Prayagraj

Mob.: 9598050238

10. निम्नलिखित शब्दों के पर्यायवाची शब्द लिखें-

मृत्यु, आँख, देवता,
माता, आकाश, फूल

11. निम्न शब्दों को अपने वाक्यों में प्रयोग करके लिखें-

सलाह, निराली, राष्ट्रीय,
भलाई, मित्र, बधाई,
चढ़कर, विद्यालय, प्रतिदिन

12. सही उत्तर के सामने सही और गलत के आगे गलत का निशान लगाइए

- (क) नितिन तीसरी कक्षा में पढ़ता था। ()
(ख) नितिन अपने मम्मी-पापा के साथ बाजार गया। ()
(ग) पापा ने सब को छोले भटूरे खिलाए। ()
(घ) नितिन को उपहार में एक साइकिल मिली। ()
(ङ) नितिन अपने दोस्तों के आने से खुश नहीं था। ()

13. किसने किसे कहा-

- (क) "अभी तुम्हारा दिमाग ठिकाने लगाता हूँ।"
(ख) "नितिन आज तुम स्कूल मत जाओ।"
(ग) "तुम्हें बरसात से पहले अपना घर बना लेना चाहिए था।"
(घ) "शाम को तुम्हारा जन्मदिन धूमधाम से मनाएँगे।"
(ङ) "भगवान ने तुम्हें दो हाथ दिए हैं।"
(च) "आज तो कोई छुट्टी भी नहीं है।"
(छ) "कभी किसी मूर्ख को सलाह नहीं देनी चाहिए।"



VASHISTH VATSALYA PUBLIC SCHOOL

An English Medium Co-Educational School
PRAYAGRAJ

Elgin Road Civil Lines Prayagraj

Mob.: 9598050238

14. अति लघु उत्तरीय प्रश्न-

- (क) चिड़िया क्या खाती है?
- (ख) बंदर चिड़िया के पास कैसे पहुँचा?
- (ग) मोर का प्रिय मौसम कौन-सा है?
- (घ) चिड़िया कहाँ बैठी थी?
- (ङ) हमारा राष्ट्रीय पक्षी क्या है?

15. लघु उत्तरीय प्रश्न-

- (क) मोर के सिर पर क्या लगी होती है?
- (ख) चिड़िया के सलाह देने पर बंदर ने क्या किया?
- (ग) मोर अपने पैरों को देखकर क्या करता है और क्यों?
- (घ) चिड़िया क्या-क्या करती है?
- (ङ) मोर के पंखों पर बनी आकृतियाँ कैसी लगती हैं?
- (च) चिड़िया को देखकर कवि क्या सोच रहे हैं?
- (छ) i. मोर का प्रिय भोजन क्या है?
ii. मोर कहाँ रहना पसंद करता है?
- (ज) बंदर क्यों ठिठुर रहा था?
- (झ) चिड़िया ने बंदर को क्या सलाह दी?
- (ञ) मम्मी ने नितिन को छुट्टी के लिए क्यों कहा?



VASHISTH VATSALYA PUBLIC SCHOOL

An English Medium Co-Educational School
PRAYAGRAJ

Elgin Road Civil Lines Prayagraj

Mob.: 9598050238

16. दीर्घ उत्तरीय प्रश्न-

- (क) 'नीली चिड़िया' कविता में कवि ने किसका वर्णन किया है?
- (ख) चिड़िया ने बंदर को सलाह देने के लिए किसका उदाहरण दिया तथा क्यों?
- (च) बादलों के गरजने पर मोर क्या करता है?
- (छ) 'मूर्ख बंदर' पाठ से हमें क्या शिक्षा मिलती है?
- (ज) i. मोर किस रंग का होता है?
ii. मोर की शारीरिक बनावट कैसी होती है?
- (झ) i. नितिन किसके साथ बाजार गया?
ii. नितिन ने बाजार में क्या-क्या किया?
- (ञ) निम्नलिखित पंक्तियों का अर्थ अपने शब्दों में लिखें -
निकला सूरज , हुआ सवेरा,
पूरब को लाली ने घेरा।
बगिया में महके सब फूल,
चहकें चिड़िया सब कुछ भूल ।

17. कठिन शब्द (याद करके लिखें)

मौसम,	फुहार,	ठंडी,
अक्सर,	प्रिय,	मुकुट,
कृष्ण,	बारिश,	घोसला,
मूर्ख,	नाश्ता,	अचरज,
छुट्टी,	फ्रॉक,	कुल्फी,
गुब्बारे,	आशीर्वाद,	नृत्य



VASHISTH VATSALYA PUBLIC SCHOOL

An English Medium Co-Educational School
PRAYAGRAJ

Elgin Road Civil Lines Prayagraj

Mob.: 9598050238

18. निम्नलिखित शब्दों के अर्थ याद करके लिखें -

नमन,	ईश,	उपहार,
अवकाश,	नृत्य,	बधाई,
सलाह,	दिमाग	ठिकाने
लगाना,	निराली,	भड़का,
लाख,	राष्ट्रीय,	सुशोभित,
प्रसन्न,	आकृति,	उड़ान,
चमकदार,	प्रसन्न,	मुकुट

HOME ASSIGNMENT
CLASS: II
MATHEMATICS

PRACTICE AND SOLVE THE ASSIGNMENT THREE TIMES IN YOUR ASSIGNMENT COPY AND ALSO PRACTICE SIMILAR EXERCISES FROM YOUR BOOK.

Q1. Fill in the blanks-

i. $173 + \underline{\quad} = 174$

ii. $\underline{\quad} + 9 = 18$

iii. $120 + 20 = \underline{\quad}$

iv. $699 + 1 = \underline{\quad}$

v. $633 + \underline{\quad} = 633$

vi. $23 + 5 = \underline{\quad}$

vii. $\underline{\quad} + 40 = 49$

ix. $\underline{\quad} + 7 = 20$

x. $19 + \underline{\quad} = 25$

Q2. Write the digits in the correct place and add:

i. $532 + 201$

ii. $167 + 256$

iii. $244 + 354$



VASHISTH VATSALYA PUBLIC SCHOOL

An English Medium Co-Educational School
PRAYAGRAJ

Elgin Road Civil Lines Prayagraj

Mob.: 9598050238

iv. $520 + 249$

v. $625 + 205$

vi. $324 + 400$

vii. $407 + 123$

viii. $324 + 405$

ix. $122 + 211$

x. $302 + 190$

Q3. Solve the following Addition:

368	499	594	278	435	304	709	555	356	400
<u>+383</u>	<u>+343</u>	<u>+347</u>	<u>+488</u>	<u>+327</u>	<u>+456</u>	<u>+123</u>	<u>+400</u>	<u>+670</u>	<u>+222</u>

Q4. Fill in the blanks-

i. $70 - 19 =$ _____

ii. 119 is 1 less than = _____

iii. $165 - 65 =$ _____

iv. When we take 20 from 140 we get _____

v. $500 - 0 =$ _____

vi. _____ - 507 = 100

vii. $200 - 5 =$ _____

viii. 209 is 1 less than = _____

ix. when we take 15 from 25 we get _____

x. _____ - 1 = 109

Q5. Subtract the following (Borrowing from Tens):

563	925	961	473	973	768	608	888	345	901
<u>-317</u>	<u>-316</u>	<u>-442</u>	<u>-227</u>	<u>-727</u>	<u>-159</u>	<u>-200</u>	<u>-105</u>	<u>-50</u>	<u>-112</u>

Q6. Subtract the following:

901	300	702	601	405	506	709	883	999	235
<u>-566</u>	<u>-135</u>	<u>-177</u>	<u>-488</u>	<u>-269</u>	<u>-278</u>	<u>-100</u>	<u>-90</u>	<u>-400</u>	<u>-60</u>



VASHISTH VATSALYA PUBLIC SCHOOL

An English Medium Co-Educational School
PRAYAGRAJ

Elgin Road Civil Lines Prayagraj

Mob.: 9598050238

Q7. Solve the following Addition (Regrouping twice):

277	595	389	395	276	186	409	345	896	844
<u>+346</u>	<u>+257</u>	<u>+299</u>	<u>+487</u>	<u>+488</u>	<u>+254</u>	<u>+345</u>	<u>+120</u>	<u>+672</u>	<u>+100</u>

Q8. From the following numbers, find all the number pairs that give a sum total of 50:

2 49 10 3 30 1 15 22 26 44 20 35 25 19 18 25 40 9 48 12

Q9. Continue the pattern, by counting in 2s:

i. 30, 32, 34, 36, _____.

ii. 25, 27, 29, 31, _____.

iii. 13, 15, 17, 19, _____.

iv. 80, 82, 84, 86, _____.

v. 100, 102, 104, 106, _____.

Q10. Write even numbers and odd numbers.

i. 66 is an _____ number.

ii. 95 is an _____ number.

iii. 73 is an _____ number.

iv. 48 is an _____ number.

v. 69 is an _____ number.

vi. 56 is an _____ number.

vii. 79 is an _____ number.

viii. 06 is an _____ number.

ix. 37 is an _____ number.

x. 101 is an _____ number.

Q11. Arrange the numbers in increasing order.

i. 38, 56, 84, 75

ii. 23, 81, 18, 32

iii. 32, 45, 56, 67



VASHISTH VATSALYA PUBLIC SCHOOL

An English Medium Co-Educational School
PRAYAGRAJ

Elgin Road Civil Lines Prayagraj

Mob.: 9598050238

- iv. 98, 87, 65, 43
- v. 67, 23, 56, 09
- vi. 59, 70, 73, 91
- vii. 67, 78, 34, 25
- viii. 70, 23, 56, 90
- ix. 23, 56, 90, 63
- x. 88, 43, 96, 12

Q12. Arrange the numbers in decreasing order:

- i. 58, 97, 42, 85
- ii. 82, 28, 13, 46
- iii. 32, 45, 56, 67
- iv. 98, 87, 65, 43
- v. 67, 22, 55, 09
- vi. 99, 76, 73, 98
- vii. 57, 88, 84, 05
- viii. 90, 43, 26, 40
- ix. 43, 56, 80, 23
- x. 80, 93, 94, 42

Q13. Write the position:

- i. The position of I in LION is
- ii. The position of R in DEER is
- iii. The position of A in SNAKE is
- iv. The Position of G in FROG is

Q14. A women had Rs.712 rupees. She spent Rs.450 rupees on buying a bedsheet. How much money is left with her now?

Q15. A book has 560 pages. If Radha read 153 pages, how many pages are left to read?

Q16. A train carried 751 passengers. At a station, 270 passengers got down. How many passengers were left in train.

Q17. In test match, India scored 563 runs, whereas Australia scored 829 runs. How many runs did both teams score in all?



VASHISTH VATSALYA PUBLIC SCHOOL

An English Medium Co-Educational School
PRAYAGRAJ

Elgin Road Civil Lines Prayagraj

Mob.: 9598050238

- Q18. In a garden the gardener collected 420 mangoes on the first day and 87 mangoes on the next day. How many mangoes did he collect in these two days?
- Q19. What is addends?
- Q20. What is subtrahends?
- Q21. 12. In a bus there were 110 men, 20 women and 3 children. How many passengers were there in total?
- Q22. Nairitee has 96 coins and Nitheeya has 23 coins. How many coins do they have altogether?
- Q23. There were 28 fish in a big water tank. 43 more fish were put in the tank. How many fish are there in all now?
- Q24. A fruit seller has 94 raw guavas and 58 ripe guavas. How many guavas does he have in all?
- Q25. Sarah scored 154 runs in the first cricket match and 132 runs in the second. How many runs did she score in all?
- Q26. There are 96 pages in a book. Nitheeya Reads 10 pages in a day. How many pages she has to read to complete the book?
- Q27. Nairitee buys 97 chocolates. She wants to put 10 chocolates in each packet. How many packets she could make and how many single chocolate are left with her?
- Q28. In a class of 46 students, 12 students went for sports practice. How many did not go?
- Q29. Arpita had 85 stickers. She gave away 53 stickers to her friend. How many stickers was she left with?
- Q30. Learn and write the table of 2, 3, 4, and 5

HOME ASSIGNMENT 2024

CLASS- 2

SUBJECT- Science

Dear students learn and write this assignment three times in your assignment copy. Parents are requested to guide and motivate their wards to do their homework at least two times in a week.

Q1. Fill in the blanks and learn them:

1. Wild animals live in_____.
2. Rhinoceroses are killed for their _____.
3. We get wool from the _____.
4. A _____ guards our homes.
5. The _____ helps us to think.
6. _____ grow along the ground.
7. Plants need air, sunlight and _____ to make food.
8. The cactus plant has spines in place of _____.



VASHISTH VATSALYA PUBLIC SCHOOL

An English Medium Co-Educational School
PRAYAGRAJ

Elgin Road Civil Lines Prayagraj

Mob.: 9598050238

9. Oils used for cooking are called _____ oils.
10. Juice of _____ leaves is used to cure cold and cough.
11. We add _____ to make our food tasty.
12. Animals, like the hyena, keep the forest _____.
13. Herbivores eat _____.
14. We should be _____ to animals.
15. After we swallow our food, it goes into our _____.

Q2. Learn the spellings and define the following terms:

- | | | |
|--------------------|---------------------|---------------------|
| 1. Carnivores | 6. Herbivores | 11. Shrub |
| 2. Omnivores | 7. Internal Organs | 12. Climbers |
| 3. External organs | 8. Domestic Animals | 13. Germination |
| 4. Breath | 9. Manure | 14. Aquatic animals |
| 5. Digest | 10. Nutrients | 15. Trunk |

Q3. Match the following:

Column A

- a. Honey
- b. Silk
- c. Crocodile
- d. Rabbit
- e. Heart
- f. Root
- g. Oil
- h. Crow
- i. Underground stem
- j. Acacia tree

Column B

1. Pumps blood
2. Burrow
3. Honeybee
4. Carnivore
5. Silkworm
6. Gum
7. Omnivore
8. Groundnut
9. Ginger
10. Carrot

Q4. Learn and write answer of following questions:

1. How do jackals and vultures help to keep the forests clean?
2. How does dogs help us?
3. Name the homes of:



VASHISTH VATSALYA PUBLIC SCHOOL

An English Medium Co-Educational School
PRAYAGRAJ

Elgin Road Civil Lines Prayagraj

Mob.: 9598050238

i. Snake ii. Rabbit iii. Lion iv. Birds

4. Why do we need to exercise?

5. Name four internal organs of our body.

6. Why should we protect forests and wild animals?

7. Name any two animals that carry load for us.

8. How is wool used by us?

9. How should we care of our animals?

10. What does the stomach do?

11. What is the function of a bud?

12. Why do plants need water?

13. How do plants make their food?

14. Which plant gives us paper?

15. Name any two plants that give us medicines.

16. Write the function of the stem.

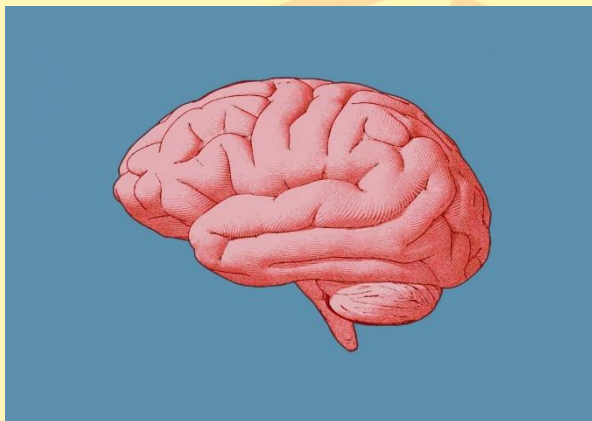
17. What is the function of a leaf?

18. Name any three aquatic plants.

19. Name two things we get from honeybees.

20. Why do we need to exercise?

Q5. Activity Based Questions:



1.

a. Name the organ shown in this picture.

b. Identify the organ as Internal or External organ.

c. Where do you find this organ?

d. Write a function of the brain.



VASHISTH VATSALYA PUBLIC SCHOOL

An English Medium Co-Educational School
PRAYAGRAJ



2.

alamy

- What does this picture show?
- How much water does this plant need?
- Which part of this plant converts into spines?
- Where does this plant grow?



3.

VectorStock®


VectorStock.com/44712031

- Identify the animal as herbivore, carnivore or omnivore.
- Name the animal shown in this picture.
- Where does this animal live?
- What are carnivores?



VASHISTH VATSALYA PUBLIC SCHOOL

An English Medium Co-Educational School
PRAYAGRAJ



4. VectorStock VectorStock.com/7353830

- Identify the animal as farm animal or pet animal.
- Name the animal shown in this picture.
- Name any two things we get from this animal.
- Write any use of cow dung.

Q6. Draw and colour the diagrams of:

- Two things we get from animals.
- One thing made of wool.
- One internal organ
- Lotus

Q7. Paste the following things and name them:

- Two Carnivores
- Two Herbivores

Q8. Learn the spellings and write three times each word:

Forests	Carnivores	Swallow	Greed	Horns
Hyenas	Vultures	Tusks	Herd	Omnivores
Health	Nutrients	Prawns	Veterinary	Woollen
Silkworm	Honeybees	Stomach	Complex	Exercise
Muscles	Heart	Lungs	Proper	Controls
Carbon dioxide	Oxygen	Leather	Shelter	Wonderful



VASHISTH VATSALYA PUBLIC SCHOOL

An English Medium Co-Educational School
PRAYAGRAJ

Elgin Road Civil Lines Prayagraj

Mob.: 9598050238

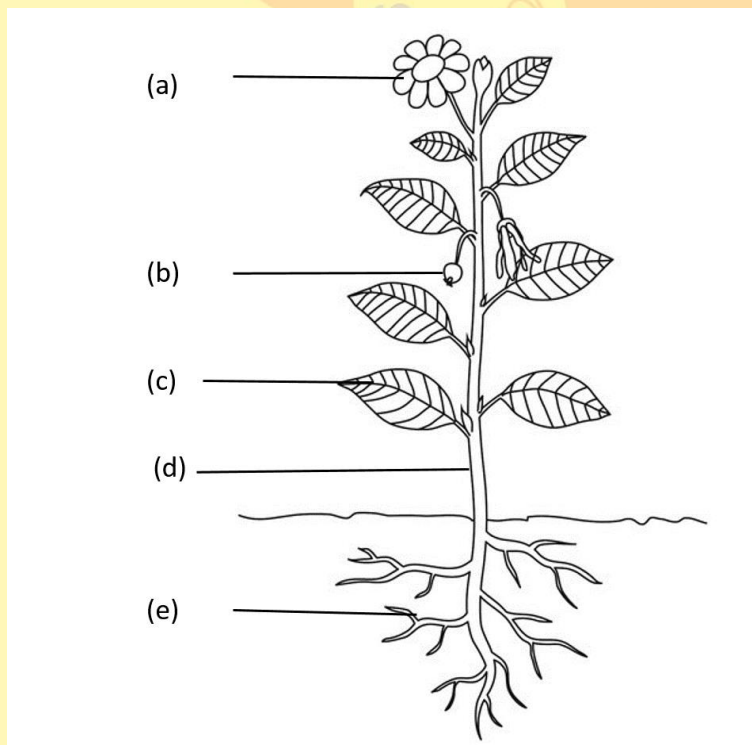
Q9. Paste the pictures of the following things you eat in lunch:

1. Roots that we eat
2. Underground stem
3. Leaves that we eat
4. Stems that we eat
5. Seeds that we eat

Q10. Paste the leaves of the following and name them:

1. Two Trees
2. Two Herbs
3. Two Shrubs

Q11. Label the parts of the plant:





VASHISTH VATSALYA PUBLIC SCHOOL

An English Medium Co-Educational School
PRAYAGRAJ

Elgin Road Civil Lines Prayagraj

Mob.: 9598050238

HOME ASSIGNMENT 2024-25

CLASS-II

SUBJECT- SOCIAL STUDIES

**LEARN AND SOLVE THE ASSIGNMENT THREE TIMES IN YOUR ASSIGNMENT
COPY AND ALSO PRACTISE SIMILAR EXERCISES**

1. Learn and fill in the blanks-

1. We can make water clean by ____ it.
2. A house protects us from ____.
3. ____ and ____ also need water.
4. ____ houses are found in towns and cities.
5. ____ water can make us sick.
6. A doctor of animals is also known as ____.
7. Pongal is the main festival of ____.
8. On Holi people play with ____.
9. Junk food items are not good for our ____.
10. We need food when we feel ____.
11. The ____ and ____ are big water bodies.
12. Kaccha houses are found in ____.
13. We should ____ garbage into the dustbin.
14. Clothes ____ us from heat.
15. We get ____ and ____ from the animals.

2. Learn and write true or false-

1. Animal need water to drink and to stay cool.
2. Architect makes the wall of a house.
3. Electrician pits wires switches and plugs of a house.
4. We should waste water.
5. Boiling the water can kill all the germs.
6. We should not eat a balanced diet.
7. We get food from plants and animals.
8. Our earth has more land than water.
9. Opening near the ceiling are called ventilators.
10. Kutcha house are found in towns and cities.
11. We should not iron our clothes properly.
12. We should kill animals for clothes.
13. Pucca house is a strong house.



VASHISTH VATSALYA PUBLIC SCHOOL

An English Medium Co-Educational School
PRAYAGRAJ

Elgin Road Civil Lines Prayagraj

Mob.: 9598050238

14. Children should not help their parents. _____

15. A sweet dish called sewaiyan is prepared on Eid. _____

3. Learn and Circle the correct answer-

1. The Dal Lake in Kashmir is famous for igloo / boat.
2. Water from the rivers and ponds is safe / Unsafe to drink
3. An igloo is made of snow / mud
4. We need water to breathe / drink
5. Water of the seas and oceans are salty / sweet.
6. Dussehra lasts for five / ten days.
7. Diwali comes twenty days before/ after Dussehra.
8. Pongal is a popular festival of Kerala / Tamil Nadu.
9. 25th December is the birthday of Lord Buddha / Jesus Christ.
10. We must not waste / save water.
11. We get cotton from cotton plants / jute plants.
12. People who do special jobs wear uniform / jeans.
13. People in hot regions wear cotton / woolen clothes.
14. A caravan has wheels / balcony.
15. We get milk and eggs from animal / plant.

4. Match the following-

Column A

Column B

Caravan

a) hut

Igloo

b) snow

Outdoor game

c) temporary house

Tent

d) ludo

Kaccha house

e) wheels

House boat

f) apartment

Carpenter

g) pipes

Plumber

h) water

Pucca house

i) furniture

. Indoor game

j) cricket

. Onam

k) 15th August

. Republic Day

l) Tamil Nadu

. Gandhi Jayanti

m) Kerala

. Independence Day

n) 26th January

. Pongal

o) 2nd October



VASHISTH VATSALYA PUBLIC SCHOOL

An English Medium Co-Educational School
PRAYAGRAJ

Elgin Road Civil Lines Prayagraj

Mob.: 9598050238

5. Learn and Answer the following questions-

1. Where does the rainwater get collected?
2. What are kutcha house?
3. Write various uses of water.
4. Give some examples of temporary house
5. Name three things that a good house should have
6. In which places houses have sloping roofs?
7. Why is the house important for us?
8. Why we cannot use sea water or ocean water?
9. How can we make water clean?
10. What is underground water?
11. Differentiate between nuclear family and joint family.
12. What is a surname?
13. What is means of recreation?
14. What are outdoor games
15. Why do we celebrate Gandhi Jayanti?

6. Complete the words-

1. B _ m _ o _ s
2. C _ i _ m _ t _
3. D _ i _ k _ n _
4. G _ r _ s
5. T _ i _ v _ s
6. B _ l a _ c _ d
7. V _ t _ m i _ s
8. N _ t t _ i _ g
9. F _ m I _ y
10. D u _ s _ h _ a

7. Learn the spellings and write 3 times each the following words-

- | | |
|-----------------|---------------|
| 1. Surroundings | 16. Growing |
| 2. Sources | 17. Quantity |
| 3. Digging | 18. Quench |
| 4. Diversity | 19. Building |
| 5. Material | 20. Weather |
| 6. Decoration | 21. Bungalows |



VASHISTH VATSALYA PUBLIC SCHOOL

An English Medium Co-Educational School
PRAYAGRAJ

Elgin Road Civil Lines Prayagraj

Mob.: 9598050238

- | | |
|---------------|-----------------|
| 7. Immediate | 22. Sibling |
| 8. Recreation | 23. Worship |
| 9. Effigies | 24. Balanced |
| 10. Strength | 25. Vitamins |
| 11. Digestion | 26. Drinking |
| 12. Osmosis | 27. Germs |
| 13. Bucket | 28. Underground |
| 14. Apartment | 29. Ventilation |
| 15. Architect | 30. Eskimos |

8. Draw and Colour-

- An Igloo
- Kuchcha house
- Pucca house
- House boat
- Hand pump
- Any two indoor games

Home assignment 2024-25

CLASS- 2

SUBJECT- COMPUTER

All questions are compulsory Write these all questions three times in your assignment copy.

A) Learn and write these hard words two times in your assignment copy:-

1. Pointer
2. Placing
3. Action
4. Pointing
5. Device
6. System
7. Screen
8. Optical
9. Wireless



VASHISTH VATSALYA PUBLIC SCHOOL

An English Medium Co-Educational School
PRAYAGRAJ

Elgin Road Civil Lines Prayagraj

Mob.: 9598050238

10. Picture
11. Navigation
12. Keyboard
13. Standard
14. Special
15. Spacebar
16. Features
17. Performs
18. Preparing
19. Calculation
20. Documents
21. Hospital
22. Diagnosing
23. Railway
24. Internet
25. Machine
26. Departure
27. Printer
28. Headphone
29. Uninterrupted
30. Recording

(B) Fill in the blanks -

1. A _____ is a pointing device.
2. A _____ click is generally used to open a file.
3. The _____ key moves the cursor to the end of the line.
4. The _____ key is used for giving space between the words.
5. When the _____ key is ON, all the letters typed will appear in capital.
6. At airports computer is used for booking _____.
7. We can record our voice on computer with the help of a _____.
8. There are many keys on the _____.
9. The _____ performs all calculation.



VASHISTH VATSALYA PUBLIC SCHOOL

An English Medium Co-Educational School
PRAYAGRAJ

Elgin Road Civil Lines Prayagraj

Mob.: 9598050238

10. To shut down the computer, first press the_____.

(C) Write (T) for True and (F) for False :

1. Double click means pressing the left mouse button once.
2. There is no difference between left and right click
3. Pressing and releasing left mouse button is called left click.
4. Num lock key is used to turn on numeric keypad.
5. For moving the cursor to the next line "enter" key is used.
6. Man cannot make mistakes.
7. A computer gets tired after working for several hours.
8. The buttons on the keyboard are called the keys.
9. All the parts of the computer are controlled by the CPU.
10. A Computer is an electronic machine.

(D) Tick the correct answer:

1. There are _____ shift keys on keyboard.
i) 3 ii) 2 iii) 1
2. How many alphabet keys are there in keyboard.
i) 26 ii) 20 iii) 62
3. Which keys helps to move cursor on screen.
i) Spacebar ii) Caps lock iii) Arrow
4. Which is not the function of the mouse?
i) Dragging ii) typing iii) Clicking
5. Which mouse is light instead of ball.
i) Optical ii) Scroll iii) Two button
6. _____ is used to withdraw money.
(a)ATM (b) Home (c)Shop
7. CD stands for_____
(a)Coded disc (b) Compact disc (c) None of these
8. The_____ performs all calculations.
(a) Mouse. (b) Speaker. (c) CPU



VASHISTH VATSALYA PUBLIC SCHOOL

An English Medium Co-Educational School
PRAYAGRAJ

Elgin Road Civil Lines Prayagraj

Mob.: 9598050238

E) Define the terms and learn them:-

1. Monitor
2. Central processing unit
3. Microphone
4. Speaker
5. Headphone
6. Desktop
7. Input
8. Process
9. Output
10. Mouse
11. Mouse pad
12. Scrolling
13. Cursor
14. Mouse pointer
15. Backspace

(F) Answer Type Questions -

1. What is drag and drop ?
2. Name the types of mouse.
3. What is delete key?
4. What is shift key used for?
5. What is the use of cursor control keys ?
6. State any two differences between man and computer.
7. What is the use of computer at home?
8. Name the main parts of the computer.
9. Why is printer used?
10. Which device is used for entering the data into a computer?
11. Which part of the computer works on data to give the output?
12. Which part of the computer looks like a TV screen?



VASHISTH VATSALYA PUBLIC SCHOOL

An English Medium Co-Educational School
PRAYAGRAJ

Elgin Road Civil Lines Prayagraj

Mob.: 9598050238

(G) Look at the different parts of the computer given below and write their names : **

(H) Draw and colour the diagram of -

- i. Mouse
- ii. Keyboard

HOME ASSIGNMENT 2023-24 CLASS- II SUBJECT- GENERAL KNOWLEDGE

LEARN AND SOLVE THE ASSIGNMENT THREE TIMES IN YOUR ASSIGNMENT COPY AND ALSO PRACTISE SIMILAR EXERCISES

(A) Learn and write fill in the blanks:-

1. Our national flag is called the _____.
2. _____ is a famous Rajasthani dish.
3. India is the _____ largest by land area and first most popular country in the world.
4. Our country is famous for its _____ and _____ dance.
5. Karan kasaag is the popular dish of _____ and _____.
6. The green is stand for _____ and _____.
7. _____ temple is the largest Hindu temple by area 24000 m2 in the world.
8. _____ is a dance performed only by male dancers.
9. All of us need food to stay _____.
10. The national flag was hoisted for the first time by _____.



VASHISTH VATSALYA PUBLIC SCHOOL

An English Medium Co-Educational School
PRAYAGRAJ

Elgin Road Civil Lines Prayagraj

Mob.: 9598050238

(B) Learn and write match the following-

COLUMN A

1. Netaji
3. Chhole Bhature
5. Pav Bhaji
7. Khandvi
9. Idli Sambhar

2. Punjab
4. Subhash Chandra Bose
6. Tamil Nadu
8. Maharashtra
10. Gujarat

COLUMN B

- A. Taj Mahal
- C. Qutub Minar
- E. Lonavala
- G. Gulmarg
- I. Mussorie

- B. Maharashtra
- D. Jammu and Kashmir
- F. Uttarakhand
- H. Delhi
- J. Agra

(C) Learn and write the name of the freedom fighters:-

1. The Iron Man of India _____.
2. Netaji _____.
3. First president of India _____.
4. Swaraj is my birthright _____.
5. Shaheed-e-Azam _____.

(D) Learn and write the answer in one word:-

1. In which direction does the sun rise? ____.
2. Which is the smallest state in India? ____.
3. Who is the father of the Indian Nation? ____.
4. Which is the national sport of India? ____.
5. How many players are there in a cricket team? ____.
6. Which planet in our solar system has rings? ____.
7. Which Indian state was formed in 2014? ____.



VASHISTH VATSALYA PUBLIC SCHOOL

An English Medium Co-Educational School
PRAYAGRAJ

Elgin Road Civil Lines Prayagraj

Mob.: 9598050238

8. Which type of whale can sing underwater? _____.
9. When do we celebrate Air Force Day in India? _____.
10. Which is the world's largest Iceberg? _____.

(E) Learn and write answer the following question:-

1. How many colours are there in a rainbow? _____
2. What sport does ViratKohli Play? _____
3. What does IPL stand for? _____
4. What is the capital of India? _____
5. Who is the Chief Minister of New Delhi? _____

(F) Learn and write the answer:-

1. What does WHO stands for? _____
2. Who is the founder of the Apple Inc? _____
3. What is the full form of AI? _____
4. What is the full form of BSF? _____
5. Which organization developed the NavIC system? _____
6. When do we celebrate Air Force Day in India? _____
7. Who is the founder of the Tech company Meta? _____
8. Where is the Statue of Unity located? _____
9. How many colours are there in Indian Flag? _____
10. Which is the largest continent in the world? _____
11. How many bones are there in a human body? _____
12. Which is the hardest mineral in the world? _____
13. Which city is also known as Pink City? _____
14. What is the currency of the USA? _____
15. Which is the tallest statue in the world? _____
16. How many sides does a square have? _____.
17. Which is the smallest union territory of India? _____.
18. GeetaPhogat is related to which game? _____.
19. Which city is the capital city of Madhya Pradesh? _____.



VASHISTH VATSALYA PUBLIC SCHOOL

An English Medium Co-Educational School
PRAYAGRAJ

Elgin Road Civil Lines Prayagraj

Mob.: 9598050238

20. How many players are there in a cricket team? _____.

(G) Name them-

1. A figure with 3 sides is known as a? _____
2. The smallest two-digit number is? _____
3. A figure which has no sides and no corners are called? _____
4. When any number is multiplied by 0, the answer is always? _____
5. A figure with four equal sides is called? _____
6. Which is the largest three-digit number? _____
7. One kilogram equals how many grams? _____
8. What time it will be when the minute hand and hour hand both are at 12? _____
9. Which is the largest 2-digit number? _____
10. Which is the smallest even number? _____
11. What is the place value of 9 in 1592? _____
12. When any number is multiplied by 1, the answer is The number itself _____
13. 5 times 6 equals to _____
14. There are 5 chocolates in one box. How many chocolates will be there in 4 boxes? _____
15. $10+20$ equals to _____
16. How many teeth does an adult have? _____
17. How many bones are there in the human body? _____
18. What does Sheep give us? _____
19. Paper is obtained from which plant? _____
20. Which type of plant is a money plant? _____
21. Which is the hardest mineral in the world? _____
22. Water when freezes, it changes into? _____
23. Where do Lions live? _____
24. What do Bees give us? _____
25. Sun rises in which direction? _____



VASHISTH VATSALYA PUBLIC SCHOOL

An English Medium Co-Educational School
PRAYAGRAJ

Elgin Road Civil Lines Prayagraj

Mob.: 9598050238

26. What is a house made of snow called? _____
27. Which type of clothes do we wear in the winter season? _____
28. We should always cross the road at the? _____
29. The red light of the traffic signal tells us to? _____
30. The green light of the traffic signal tells us to? _____

(H) Name any ten Freedom Fighters and paste their pictures in a chart paper.

HOME ASSIGNMENT 2024-25

CLASS- II DRAWING

1. Draw and Colour Seahorse and penguin(use Crayons)
- Or
2. Draw and colour pine apple(use pencil colour)

Craft

Make a pencil stand using ice cream stick