



# VASHISTH VATSALYA PUBLIC SCHOOL

An English Medium Co-Educational School  
PRAYAGRAJ

## HOME ASSIGNMENT 2024

### CLASS-III

### ENGLISH

Dear students learn and write this assignment three times in your assignment copy. Parents are requested to guide and motivate their wards to do their homework at least two times in a week.

**Q.1. Learn the spellings and write the meanings of the following words:**

- |                |             |                  |                |                 |
|----------------|-------------|------------------|----------------|-----------------|
| 1. Giggle      | 7. Trigger  | 13. Accidentally | 19. Flags      | 25. Wonders     |
| 2. Impatiently | 8. Ammachi  | 14. Unniappams   | 20. Drag       | 26. Keeps at it |
| 3. Beaming     | 9. Civet    | 15. Goddhis      | 21. Tumble out | 27. Appachen    |
| 4. Mischief    | 10. Attic   | 16. Sultry       | 22. Patient    | 28. Trigger     |
| 5. Pitcher     | 11. Killing | 17. Showers      | 23. Awaits     | 29. Bait        |
| 6. Miles       | 12. Sigh    | 18. Sprout       | 24. Gasps      | 30. Flatterer   |

**Q. 2. Learn the spellings and make sentences from the following words:**

- |            |                |                |                |              |
|------------|----------------|----------------|----------------|--------------|
| 1. Await   | 6. Excitement  | 11. Caught     | 16. Drag       | 21. Around   |
| 2. Empty   | 7. Trap        | 12. Mischief   | 17. Sprout     | 22. Found    |
| 3. Breeze  | 8. Await       | 13. Giggle     | 18. Showers    | 23. Talent   |
| 4. Basket  | 9. Impatiently | 14. Tumble out | 19. Beaming    | 24. Straight |
| 5. Pitcher | 10. Sultry     | 15. Patient    | 20. Celebrated | 25. Perhaps  |

**Q. 3. Read these lines and answer the questions:**

1. 'He couldn't run to save his life.

Yes, he isn't much fun.'

a) Why is he not 'much fun'?

b) Do you think the speaker likes him?

c) What does the line 'He couldn't run to save his life mean?



# VASHISTH VATSALYA PUBLIC SCHOOL

An English Medium Co-Educational School  
PRAYAGRAJ

2. 'No, I hid some in the kitchen for emergencies'

- Who said this to whom?
- What did the speaker hide?
- Why did the speaker hide them?

3. You're such a good cook!

- Who said this to whom?
- Why did the speaker say so?
- What happened after this?

4. 'It's summer when all this happens  
the action never flags.'

- What is meant by 'all this' here?
- Is it fair to call summer boring? Why/Why not?
- What does the speaker mean by 'action never flags'?

5. 'Come, come', Nani calls softly.'

- Whom does Nani call?
- Do they come? How?
- What does Nani do for them?

6. 'It's a talent, I suppose  
I'm sure if he keeps at it  
He'd win the talent shows.'

- Who is the speaker talking about?
- What 'talent', is being talked about in these lines?
- How can this talent make him win talent shows?

Q.4. Learn and write answer of the following questions:

- Where can be the cat always found?
- How did Ammachi plan to catch the thief?
- Do you think Sooraj was as clever as Ammachi? Why/Why not?



# VASHISTH VATSALYA PUBLIC SCHOOL

An English Medium Co-Educational School  
PRAYAGRAJ

4. What excites Ijas and makes him rush to the kitchen?
5. What does Ijas get on the day of Eid from Vikram?
6. Why is the kitchen the cat's favourite room?
7. Who was the unniappam thief?
8. List two things that Ijas tries to do with what he got from Vikram.
9. Why does the speaker speak with a 'sigh'?
10. What did Ammachi do after setting up the trap?
11. Which fruits are available in summer?
12. What are the things that make one feel that summer is a 'real drag'?
13. What is the name of the lane behind the school?
14. What is special about the Lane of Dreams?
15. Name any three lanes from the story.
16. How is the evening different from the daytime in summer?
17. When Venki tells Nani that he wants to go with her to the park, why does she pick up her shopping bag?
18. In what does Venki see 'a piece of her favourite saree and a bit of his Ma's kurta'?
19. What does the speaker mean by I'd tell you straight?
20. How does Ijas feel about the surprise?

Q. 5. Write three nouns that you can make from each word:

1. garden    2. Tractor    3. Cabbage    4. Chair    5. Computer

Q. 6. Rewrite the following sentences correctly:

1. bhutan and nepal are india's neighbours.
2. rahul's cousin kavita made idlis for him.
3. eshan has written a wonderful poem.
4. bela took a flight to Mumbai.
5. goa is not very far from mangalore.

Q. 7. Write the correct action words to complete these sentences:

1. Yuvraj is \_\_\_\_\_ to catch the ball. (running/rolling)
2. Amina is \_\_\_\_\_ a book. (reading/singing)
3. Jack is \_\_\_\_\_ up the beanstalk. (talking/climbing)
4. The captain of the team is \_\_\_\_\_ the ball. (eating/throwing)
5. The child was \_\_\_\_\_ with joy. (crying/laughing)





# VASHISTH VATSALYA PUBLIC SCHOOL

An English Medium Co-Educational School

PRAYAGRAJ

6. The baby is \_\_\_\_\_ towards its mother. (crawling/flying)
7. Pushpa was \_\_\_\_\_ dried twigs. (collectiong/climbing)
8. The monkey is \_\_\_\_\_ from tree to tree. (swinging/singing)
9. Clara was \_\_\_\_\_ the piano. (playing/singing)
10. Salim is \_\_\_\_\_ the chair. (sitting/standing)

Q. 8. Fill in the blanks with a or an:

- |                 |                    |
|-----------------|--------------------|
| 1. _____ apple  | 6. _____ boot      |
| 2. _____ packet | 7. _____ ice cube  |
| 3. _____ comb   | 8. _____ aeroplane |
| 4. _____ fish   | 9. _____ ocean     |
| 5. _____ market | 10. _____ a fly    |

Q. 9. Learn the spellings and write the words 3 times each:

Gasps	Treasures	Weighs	Appachen
Favourite	Talent	Around	Ammachi
Suppose	Sprout	Favourite	Flatterer
Disappeared	Beaming	Sigh	Unniappams
Civet	Impatiently	Emergencies	Shutter
Sakhli	Amaltas	Fattest	Trigger
Sprung	Excitement	Glorious	Fragrance
Stolen	Riddles		

Q. 10. Learn and write these poems:

1. My Big Fat Cat
2. Oh, Summer!

Q. 11. Learn and write an essay on 'Traffic Rules'.



# VASHISTH VATSALYA PUBLIC SCHOOL

An English Medium Co-Educational School  
PRAYAGRAJ

**Q. 12. Write the plural forms of these nouns:**

1. Crow      2. Park      3. Table      4. Fox      5. Hero
6. Box      7. Pen      8. Branch      9. Slice      10. Tiger

**Q.13 Rearrange these words to make questions and add a question mark in the end:**

1. does concert when begin the
2. Jack's is where school
3. is Karthik what Saturday is doing this
4. do live you where
5. much to do write time we how have
6. bus to goes which Nagpur
7. does what sister do your
8. pen lying floor is on whose the
9. someone call did me
10. is Natasha going where

**Q14. Write the names of the groups to which the nouns belong:**

Birds, furniture, insects, colours, fruits, vegetables, games, flowers, cities, countries

1. mango, strawberry, banana, grapes
2. bed, sofa, armchair, table
3. lily, daisy, rose, sunflower
4. ant, wasp, bee, mosquito
5. pigeon, dove, eagle, parrot
6. ludo, carrom, cricket, football
7. India, America, China, Japan
8. black, purple, violet, orange
9. carrot, onion, potato, cucumber

**Q15. Rewrite these sentences using 'is', 'am' or 'are':**

1. There many flowers on this branch.
2. This book heavy.
3. The water bottles empty.
4. The room empty.
5. My name Shafeeq.
6. I finishing my homework.
7. There no apples in the fridge.
8. Shahid helping his mother.



# VASHISTH VATSALYA PUBLIC SCHOOL

An English Medium Co-Educational School  
PRAYAGRAJ

9. The house very old.

10. My new classmates friendly.

Q16. Fill in the blanks with 'was', 'were' or 'had':

1. The children \_\_\_\_\_ thrilled to go on a picnic.
2. The train \_\_\_\_\_ on time.
3. Mohideen \_\_\_\_\_ a football player.
4. There \_\_\_\_\_ many animals in the zoo.
5. Birbal \_\_\_\_\_ a very clever man.
6. I \_\_\_\_\_ my books with me.
7. The trip \_\_\_\_\_ very tiring.
8. My blue shoes \_\_\_\_\_ missing.
9. I \_\_\_\_\_ a yellow T-shirt.
10. The men \_\_\_\_\_ big baskets with them.

Q 17. Fill in the blanks with 'a' or 'an':

1. Tito goes to school on \_\_\_\_\_ bicycle.
2. I have \_\_\_\_\_ blanket.
3. Vini's mother gave her \_\_\_\_\_ orange to peel.
4. I climbed \_\_\_\_\_ tree.
5. My birthday is \_\_\_\_\_ week from now.
6. Arif saw \_\_\_\_\_ fireman on his way.
7. Abhinav had \_\_\_\_\_ egg for breakfast.
8. \_\_\_\_\_ octopus has eight arms.
9. Aswathy and her grandfather are going for \_\_\_\_\_ walk.
10. Anil is \_\_\_\_\_ optician.

## HOME ASSIGNMENT 2024-25

CLASS- III

HINDI

(नोट- सम्पूर्ण प्रश्न पत्र अपनी अभ्यास-पुस्तिका (कॉपी) में याद करके तीन बार लिखें)

1. निम्नलिखित शब्दों के वचन बदलकर लिखिए -

चादर,

चूहा,

छात्रा,





# VASHISTH VATSALYA PUBLIC SCHOOL

An English Medium Co-Educational School  
PRAYAGRAJ

जूता,	दवाई,	अध्यापिका,
गमला,	बहू,	नाला,
बच्चा,	रोटी,	घड़ी,
माला,	किताब,	कक्षा,
जुराब,	ताला,	मेज

2. निम्नलिखित वाक्यों में संज्ञा शब्द के स्थान पर सर्वनाम शब्द लिखकर वाक्यों को फिर से लिखें -

(क) गीता एक लड़की है ।

(ख) रीमा नृत्य कर रही है ।

(ग) सीता को भूख लगी है ।

(घ) मीरा खाना खा रही है ।

3. 'र' के विभिन्न रूपों के अलग-अलग शब्द लिखें -

(क) र मूल रूप \_\_\_\_\_

(ख) र (रेफ) . \_\_\_\_\_

4. निम्नलिखित राज्यों में बोली जाने वाली भाषाएँ लिखें -

गुजरात, उड़ीसा, महाराष्ट्र, पंजाब

5. निम्नलिखित शब्दों के दो-दो पर्यायवाची शब्द लिखें -

फूल, सागर, कपड़ा,

धैर्य, झंडा, माता,



# VASHISTH VATSALYA PUBLIC SCHOOL

An English Medium Co-Educational School  
PRAYAGRAJ

बगीचा,	ईश्वर,	दिन,
मेघ,	सूरज,	घोड़ा,
पेड़,	साँप	कष्ट

6. निम्नलिखित शब्दों को अपने वाक्य में प्रयोग करके लिखें -

रंचमात्र,	हताश,	उत्साह,
बाधा,	कष्ट,	शक्तिशाली,
भाना,	कामयाब	अनुपस्थित

7. निम्नलिखित शब्दों के विलोम शब्द लिखें -

अपना,	असली,	नीचे,
अनुपस्थित,	बलवान,	घृणा,
आस्तिक,	उदय,	उन्नति,
अगला,	आधार,	इधर,
कोमल,	क्रोध	सुबह

8. निम्नलिखित शब्दों को अपने वाक्यों में प्रयोग करके लिखें-

शक्तिशाली,	कामयाब,	कष्ट,	हताश,
ईमानदारी,	क्रोध,	मनोबल,	उत्साहित,
धैर्य,	मृदुल,	नभ,	निरंतर,
क्षमा,	सहपाठी,	निर्दोष,	त्यौहार





# VASHISTH VATSALYA PUBLIC SCHOOL

An English Medium Co-Educational School  
PRAYAGRAJ

9. निम्नलिखित मुहावरों का अर्थ लिखते हुए अपने वाक्यों में प्रयोग करें -

खून खौल उठना,                      रूँधे गले से,                      मौत के घाट उतार देना,  
लहू लुहान होना,                      दाँतो तले अंगुली दबाना,                      फूला न समाना,  
ठान लेना,                      कान भरना,                      घी के दिए जलाना,  
पानी-पानी होना,                      छक्के छुड़ाना,                      नौ दो ग्यारह होना,  
आसमान सिर पर उठाना, किताबी कीड़ा,                      आँखों का तारा

10. निम्नलिखित शब्दों की वर्तनी ठीक कीजिए-

जम्मु,                      भडार,                      जिवन,                      मकड़ि,  
समीति,                      गोलीबारि,                      सब्जीयाँ,                      रोटि,  
पड़ौसि,                      गांव,                      बीजलि,                      विर

11. कविता की पंक्तियों को पूरा करें-

चाहे कितने\_\_\_\_,  
\_\_\_\_बरसें बादल।  
चाहे कितनी\_\_\_\_।  
\_\_\_\_कड़के बिजली ।  
\_\_\_\_बरसें ओले ।  
चाहे अंधड़\_\_\_\_।  
\_\_\_\_सूरज,\_\_\_\_  
अपने\_\_\_\_।  
\_\_\_\_करते।  
जो\_\_\_\_।



# VASHISTH VATSALYA PUBLIC SCHOOL

An English Medium Co-Educational School  
PRAYAGRAJ

हँस - हँसकर\_\_\_\_\_।

इसीलिए\_\_\_\_\_।

\_\_\_\_\_भाते ।

12. किसने किससे कहा -

- (क) "रुपए क्या तुमने लिए हैं ?"
- (ख) "फिर अब क्यों बता दिया ?"
- (ग) "जबकि वे तो निर्दोष हैं ।"
- (घ) "रुपए मैंने लिए हैं ।"
- (ङ) "वरना मैं पुलिस को बुलाऊँगा ।"
- (च) "यह मकड़ी एक नन्ही सी जीव है ।"
- (छ ) "मुझसे माँग नहीं सकते थे क्या ?"
- (ज ) "बेटा एक दिन तुम्हारा यश दूर-दूर तक फैलेगा ।"

13. अति लघु उत्तरीय प्रश्न -

- (क) आतंकवादियों के हमले के समय मुकेश की उम्र कितनी थी?
- (ख) जयवर्धन ने कहाँ शरण ली?
- (ग) मुकेश के गाँव का क्या नाम था ?
- (घ) 'गरजें बादल' कविता किसने लिखी है ?
- (ङ) जयवर्धन कहाँ का राजा था ?

14. लघु उत्तरीय प्रश्न-

- (क) सूरज ,चाँद , सितारे किसकी परवाह नहीं करते हैं?
- (ख) मुकेश और सुनील को कौन से पुरस्कार से नवाजा गया और क्यों?
- (ग) जयवर्धन ने मकड़ी से क्या सबक लिया?



# VASHISTH VATSALYA PUBLIC SCHOOL

An English Medium Co-Educational School  
PRAYAGRAJ

(घ) मुकेश किसके घर गया और क्यों ?

(ङ) युद्ध का क्या परिणाम हुआ?

(च) मुकेश कहाँ का रहने वाला था?

(छ) मकड़ी क्या कर रही थी?

(ज) सूरज, चाँद, सितारे सबको क्यों भाते हैं?

(झ) युद्ध में जयवर्धन का मनोबल क्यों टूट गया

(ञ) करमचंद ने घर के नौकरों को बुलाकर क्या कहा?

15. दीर्घ उत्तरीय प्रश्न-

(क) निम्नलिखित पंक्तियों का अर्थ स्पष्ट करें-

‘चाहे कितने बरसों ओले,  
चाहे अंधड़ पागल होले।  
लेकिन सूरज, चांद, सितारे  
अपने पथ पर चलते रहते।’

(ख) जयवर्धन पहाड़ियों में जाकर क्यों छुप गया था ?

(ग) मकड़ी क्या कर रही थी?

(घ) सूरज, चाँद, सितारे सबको क्यों भाते हैं?

(ङ) युद्ध में जयवर्धन का मनोबल क्यों टूट गया?

(च) करमचंद ने घर के नौकरों को बुलाकर क्या कहा?

16. ‘गरजें बादल’ कविता की आठ लाइनें याद करके सुंदर अक्षरों में अपनी कॉपी में लिखें -

17. निम्नलिखित कठिन शब्द याद करके अपनी कॉपी में लिखें -

वर्चस्व, उमंग, धैर्य, निरंतर,





# VASHISTH VATSALYA PUBLIC SCHOOL

An English Medium Co-Educational School  
PRAYAGRAJ

आश्चर्यचकित, क्रोध, मात्र, अंधड़,  
प्यारे, दुर्भाग्य, सुचारु, भंडार-कक्ष,  
आतंकवादी, लहलुहान, जोशो-खरोश, विशाल,  
प्रयास, शक्तिशाली, भर्ती, प्रकृति

18. निम्नलिखित शब्दों के अर्थ याद करके अपनी कॉपी में लिखें-

मनोबल, शत्रु, हताश, कामयाब,  
भर्ती, मृत्यु, थामना, बाधा,  
पथ, कष्ट, सुचारु, वोट,  
योगदान, प्रयास, शक्तिशाली, वर्चस्व,  
उत्साह, भंडारकक्ष, व्यवस्था, थामना

## HOME ASSIGNMENT

### CLASS: III

### MATHEMATICS

PRACTICE AND SOLVE THIS ASSIGNMENT THREE TIMES IN YOUR ASSIGNMENT COPY AND PRACTICE SIMILAR EXERCISES FROM YOUR BOOK

**Q1. Answer the following questions-**

- The ones digit in the sum of 3656 and 1948 is:
- If we add 9 tens, 5 hundreds and 3 ones, then the result is:
- 14 less than 41 is :
- Which number will come next in the pattern shown below?  
63, 61, 57, 51, \_\_\_\_
- continue the pattern 12, 24, 36, \_\_, \_\_, \_\_\_\_

**Q2.Fill in blanks:**

- $2357 + 1356 = 1356 + \underline{\hspace{2cm}}$
- $5965 + \underline{\hspace{2cm}} = 5965$
- $1064 + \underline{\hspace{2cm}} = 6397 + 1064$
- $\underline{\hspace{2cm}} + 2391 = 2391 + 5137$
- $\underline{\hspace{2cm}} - 2090 = 321 + 456$



# VASHISTH VATSALYA PUBLIC SCHOOL

An English Medium Co-Educational School  
PRAYAGRAJ

vii.  $3211 - 1211 + 2301 = \underline{\hspace{2cm}} + 3421$

viii.  $1213 - \underline{\hspace{2cm}} = 1213$

ix.  $9999 + 1 = \underline{\hspace{2cm}}$

x.  $(1000 - 1) + 1 = \underline{\hspace{2cm}}$

### Q3. Arrange in columns and then add:

i.  $1998 + 2146 + 99 + 9$

ii.  $3047, 2964$  and  $3782$

iii.  $3279 + 689 + 78 + 127$

iv.  $1378 + 2659 + 1235$

v.  $4123 + 1532 + 4332$

vi.  $1221 + 2112 + 3221 + 1020$

vii.  $1000 + 1222 + 3333 + 40$

viii.  $3254 + 302 + 3241$

ix.  $234 + 413 + 3132$

x.  $3132 + 154 + 4712$

### Q4. Frame a simple word problem for each of the following statements:

i.  $235 + 35 = ?$

ii.  $428 + 125 = ?$

iii.  $289 + 56 = ?$

iv.  $635 + 74 = ?$

v.  $245 + 45 = ?$

vi.  $222 + 134 = ?$

vii.  $321 + 678 = ?$

viii.  $567 - 211 = ?$

ix.  $654 - 90 = ?$

x.  $500 - 100 = ?$

### Q5. Addition:-

$\begin{array}{r} 4625 \\ 2343 \\ + 3628 \\ \hline \end{array}$	$\begin{array}{r} 3150 \\ 112 \\ + 52 \\ \hline \end{array}$	$\begin{array}{r} 5674 \\ 2574 \\ + 2113 \\ \hline \end{array}$	$\begin{array}{r} 7237 \\ 745 \\ + 941 \\ \hline \end{array}$	$\begin{array}{r} 7894 \\ 5343 \\ + 6578 \\ \hline \end{array}$	$\begin{array}{r} 5293 \\ 7968 \\ + 9487 \\ \hline \end{array}$
-----------------------------------------------------------------	--------------------------------------------------------------	-----------------------------------------------------------------	---------------------------------------------------------------	-----------------------------------------------------------------	-----------------------------------------------------------------

$\begin{array}{r} 4186 \\ 1401 \\ + 312 \\ \hline \end{array}$	$\begin{array}{r} 3243 \\ 7890 \\ + 567 \\ \hline \end{array}$	$\begin{array}{r} 5008 \\ 9000 \\ + 32 \\ \hline \end{array}$
----------------------------------------------------------------	----------------------------------------------------------------	---------------------------------------------------------------



# VASHISTH VATSALYA PUBLIC SCHOOL

An English Medium Co-Educational School  
PRAYAGRAJ

**Q6. Write in columns and find the difference:**

i.  $4532 - 2301$

ii.  $7823 - 2602$

iii.  $5473 - 2301$

iv.  $5575 - 3343$

v.  $4989 - 2545$

vi.  $3957 - 1723$

vii.  $7586 - 6312$

viii.  $8657 - 1435$

xi.  $5569 - 2556$

x.  $9649 - 4535$

**Q7. Subtract The following:**

5143	7540	9982	7853	4806	6391	7893	4567	6722
<u>- 3947</u>	<u>- 2893</u>	<u>- 6499</u>	<u>- 3485</u>	<u>- 1387</u>	<u>- 5494</u>	<u>-2050</u>	<u>- 500</u>	<u>-1234</u>

**Q8. Subtract 4650 from 5873**

**Q9. Subtract 3814 from 5948**

**Q10. Subtract 562 from 168**

**Q11. Solve the following:**

i.  $4815 - 3175 - 3271 + 1589$

ii.  $(9300 - 1032) + 5431 + 2357$

iii.  $5709 - 2918 + 4776 - 2119$

iv.  $3252 - 1802 + 2610$

v.  $(7259 - 5369) + 2156$

vii.  $481 + 356 - 168$

viii.  $4235 - 4732 + 3543$

ix.  $(789+345)-321+45$

x.  $890+ (678+34)-567$

**Q12. Write <, > or = .**

i.  $356 - 248$  \_\_\_\_  $526 - 417$

iii.  $876 - 495$  \_\_\_\_  $671 - 532$

v.  $345-340$  \_\_\_\_  $400-340$

ii.  $3854 - 1699$  \_\_\_\_  $8332 - 7966$

iv.  $895 - 380$  \_\_\_\_  $675 - 160$

vi.  $900 - 100$  \_\_\_\_  $700+100$





# VASHISTH VATSALYA PUBLIC SCHOOL

An English Medium Co-Educational School  
PRAYAGRAJ

vii.  $220+467$  \_\_\_  $900-200$

ix.  $100+305$  \_\_\_  $305 - 100$

viii.  $300-105$  \_\_\_  $600-210$

x.  $709 - 1$  \_\_\_  $710 - 2$

**Q13.** The total cost of two bicycles is Rs.9645. If one of the bicycles costs Rs.3870, what is the cost of the second bicycle?

**Q14.** Priya and Digvijay together have a total of 2750 postcards. If Digvijay has 1692 postcards, how many postcards does priya have?

**Q15.** There are 2576 boys and 1894 girls studying in a school. What is the total number of students in the school?

**Q16.** Three classes of a school planted 2436, 1212 and 3241 trees on the foundation day. How many trees were planted altogether?

**Q17.** If 4508 men, 2987 women and 1395 children live in a village, what is the total population of the village?

**Q18.** 4200 students took part in a competition. Out of these, 2570 were girls. How many boys took part in the competition?

**Q19.** Ratna purchased books and clothes for Rs.2754. She gave Rs. 3000 to the shopkeeper. How much money will she get back.

**Q20.** In a village, there are 2520 males and 1840 females. What is the population of the village?

**Q21.** In a library, there are 3210 books on Science, 1028 books on Maths and 565 books on English literature. How many books are there in the library?

**Q22.** In a school, there are 4000 children. If 1268 are girls, how many are boys?

**Q23.** A shopkeeper has 90 oranges. He sold 51 oranges on Monday and 25 oranges on Tuesday. How many oranges are left with him?

**Q24.** Subtract 4926 from the sum of 3051 and 4257.

**Q25.** Neel's mother baked 4 cookies. When Sam joined in, she baked 7 more cookies. Neel and Sam ate up 9 cookies. How many cookies were left?

**Q26.** Which number should be added to 25483 to get the sum of 65785?

**Q27.** How much smaller is 63512 than 94291?

**Q28.** A milk-dairy produces 25,545 litres of milk every day. It supplies 15,625 litres of milk to a milk-depot and the rest to the market. How much milk is supplied to the market?

**Q29.** The sum of two numbers is 94506. One of the numbers is 49605. Find the other number.

**Q30.** Learn and write table from 1 to 10.



# VASHISTH VATSALYA PUBLIC SCHOOL

An English Medium Co-Educational School  
PRAYAGRAJ

## HOME ASSIGNMENT- 2024

Class-3

Subject- Science

Dear students learn and write this assignment three times in your assignment copy. Parents are requested to guide and motivate their wards to do their homework at least two times in a week.

Q-1 Learn the spellings and Write these hard words two times in your assignment copy:

Cockroaches	Carnivores	Stomata	Gnawers	Chameleon
Earthworms	Antennae	Lapping	Dissolved	Accident
Carefully	Bandage	Loamy	Container	Caravan
Nomad	Igloo	Drainage	Healthy	Verandah
Domestic	Rumination	Relieving	Travelling	Terrycot
Synthetic	Breakdown	Seashore	Movement	Prick

Q2. Fill in the blanks and learn them:-

- Most of the towns have \_\_\_\_\_ houses.
- A food chain always begins with a/an \_\_\_\_\_.
- It takes \_\_\_\_\_ years to form soil.
- When we get a small wound, we should first wash it with \_\_\_\_\_.
- We use \_\_\_\_\_ to breathe.
- We must immediately put the burnt area under \_\_\_\_\_ or \_\_\_\_\_.
- The windows and doors should have proper \_\_\_\_\_ to keep away flies and mosquitoes.
- \_\_\_\_\_ is formed by the breakdown of rocks
- Sunlight kills \_\_\_\_\_.
- Sunflower always turns towards the \_\_\_\_\_.



# VASHISTH VATSALYA PUBLIC SCHOOL

An English Medium Co-Educational School  
PRAYAGRAJ

**Q-3 Answer in one word and learn them:**

1. Name an animal that takes in liquid food. \_\_\_\_\_
2. Animals that eat flesh of other animals. \_\_\_\_\_
3. The part of a plant that absorbs water and minerals from soil. \_\_\_\_\_
4. The first help given to an injured person after an accident. \_\_\_\_\_
5. People who move around from place to place. \_\_\_\_\_
6. Animal that loosens the soil. \_\_\_\_\_
7. The tiny holes in the leaves through which plants breathe. \_\_\_\_\_
8. Name an animal that gives birth to young ones. \_\_\_\_\_
9. Name a sharp-edged thing that is dangerous for children to use. \_\_\_\_\_
10. A disease-spreading insect found in our houses. \_\_\_\_\_

**Q-4. Give two examples of each and learn them:**

1. Herbivores \_\_\_\_\_, \_\_\_\_\_
2. Natural things \_\_\_\_\_, \_\_\_\_\_
3. Gnawners \_\_\_\_\_, \_\_\_\_\_
4. Human-made things \_\_\_\_\_, \_\_\_\_\_
5. Synthetic fibres \_\_\_\_\_, \_\_\_\_\_
6. Domestic animals \_\_\_\_\_, \_\_\_\_\_
7. Natural fibers \_\_\_\_\_, \_\_\_\_\_
8. Omnivores \_\_\_\_\_, \_\_\_\_\_
9. Plants that show a little movement \_\_\_\_\_, \_\_\_\_\_
10. Waterproof materials \_\_\_\_\_, \_\_\_\_\_

**Q-5 Learn the spellings and Define the following terms:**

- |                  |                  |                   |                |                 |
|------------------|------------------|-------------------|----------------|-----------------|
| 1. Clayey Soil   | 2. Gnawers       | 3. Humus          | 4. Food chain  | 5. Lungs        |
| 6. First Aid box | 7. Igloo         | 8. Natural fibres | 9. Gills       | 10. Stilt house |
| 11. Herbivores   | 12. Safety rules | 13. Nomads        | 14. Sandy soil | 15. Stomata     |





# VASHISTH VATSALYA PUBLIC SCHOOL

An English Medium Co-Educational School  
PRAYAGRAJ

**Q-6 Learn and write answers of these questions:**

1. How can we keep our house clean?
2. Which animal swallow their food without chewing?
3. Write two safety rules that we should follow while-
  - a. Walking on the road
  - b. At home
  - c. In classroom
  - d. Playing in the ground
  - e. While traveling in the bus
4. Why do wear woollen clothes in winter?
5. Why is sandy soil not good for growing plants?
6. What does soil contain?
7. Write any two features that make living things different from non-living things.
8. How can we keep our house clean? Give two ways.
9. How do humans and most animals feel changes around them?
10. Why is soil important?
11. Why do we need food?
12. How does frog eat insects?
13. Why do animals move from place to place?
14. What are cud-chewing animals?
15. When should we follow safety rules?
16. How many floors does a multi-storey building has?
17. Why do we wear clothes?
18. What is the first-aid given for burns?
19. How can we avoid accidents at home?
20. What is a kachcha house made up of?
21. What is a pakka house made up of?
22. Why do we wear cotton clothes in summer?



# VASHISTH VATSALYA PUBLIC SCHOOL

An English Medium Co-Educational School

PRAYAGRAJ

23. Why is loamy soil good for growing plants?

24. What is reproduction?

25. How do plants reproduce?

Q-7 Draw and colour the diagrams of :-


1. Food chain

2. Layers of soil in a jar

3. Living things grow

4. Pakka house

Q8. Activity based question



1. \_\_\_\_\_
- a. Identity the types of houses shown in this picture.
- b. Define any one house shown in this picture.
- c. How can we keep our house clean?
- d. Why do we need a house?




2.



# VASHISTH VATSALYA PUBLIC SCHOOL

An English Medium Co-Educational School  
PRAYAGRAJ

- Identify the box.
- Write the things that should be kept in the box.
- What is the use of this box?
- What is the first aid given for burns?




- Name the animal shown in this picture.
  - Identify the animal as pet animal or domestic animal.
  - What do we get from this animal?
  - What does this animal eat?

**Q9- Observe your surroundings. Find any three food chains starting from plants. Paste the pictures and draw arrows to indicate food chain.**

**Q10. Make a list of at least 10 things around your house and park. Classify them into natural things and human-made things.**

**Q11. Identify the type of soils:**



1.



2.



3.





# VASHISTH VATSALYA PUBLIC SCHOOL

An English Medium Co-Educational School  
PRAYAGRAJ

HOME ASSIGNMENT 2024-25

CLASS-III

SUBJECT- SOCIAL STUDIES

LEARN AND SOLVE THE ASSIGNMENT THREE TIMES IN YOUR ASSIGNMENT COPY AND ALSO PRACTISE SIMILAR EXERCISES

(A) Learn and fill in the blanks -

1. The \_\_\_\_ Minister runs the government in a state.
2. \_\_\_\_ point is the southernmost part of India.
3. The \_\_\_\_ are situated to the north of India..
4. The union Territories are directly \_\_\_\_ by the the central Government .
5. India has different types of \_\_\_\_.
6. India is located in the continent of \_\_\_\_
7. Our neighbours across the sea are \_\_\_\_ and \_\_\_\_
8. Shimla is located in the state of \_\_\_\_
9. The new state carved out of Andhra Pradesh is \_\_\_\_
10. Islands located in the east of India. \_\_\_\_
11. Water bodies which surround the southern peninsula. \_\_\_\_
12. Any two neighbouring countries which share the land border with India. \_\_\_\_, \_\_\_\_

(B) Learn and write the capitals of the following states-

- |                     |                       |
|---------------------|-----------------------|
| i.Bihar.            | xi. Maharashtra       |
| ii.Uttar Pradesh    | xii.kerala            |
| iii.karnataka.      | xiii.Himachal Pradesh |
| iv.odhisha.         | xiv.Manipur           |
| v.Tamil Nadu.       | xv.Assam              |
| vi.Haryana.         | xvi. Uttarakhand      |
| vii.Rajasthan.      | xvii.West bengal      |
| viii.Madhya Pradesh | xviii.Gujarat         |



# VASHISTH VATSALYA PUBLIC SCHOOL

An English Medium Co-Educational School  
PRAYAGRAJ

ix. Punjab.                      xix. Jammu and Kashmir

x. Ladakh                        xx. Andhra Pradesh

(C) Learn and circle the correct word-

- i. India is the seventh/ ninth largest country in the world.
- ii. To the north/south of India stand the mighty Himalayas.
- iii. The southern plateau is very poor/rich in minerals.
- iv. Governor/President is the head of a states.
- v. There are 28/30 states in India.

(D) Learn and write true or false-

- i. We are governed by two governments. \_\_\_\_
- ii. Malavath Poorna climb Mount Everest at the age of 18. \_\_\_\_
- iii. The union Territories are bigger than the states. \_\_\_\_
- iv. Most of the southern part of our country is a peninsula. \_\_\_\_
- v. We have right to choose our own government. \_\_\_\_

(E) Learn and Answer the following questions.

- i. How many union territories are there in India?
- ii. What role does the central government play?
- iii. Name some neighbouring countries of India.
- iv. What are islands? Name the two main Islands of India.
- v. Why is life difficult in the desert?
- vi. What makes the northern plains fertile?
- vii. What role does the state government play?
- viii. What is the difference between a plain and plateau?
- ix. Which is the longest beach in India?
- x. Which area is known as 'food bowl' of India.
- xi. Define Horizon?



# VASHISTH VATSALYA PUBLIC SCHOOL

An English Medium Co-Educational School  
PRAYAGRAJ

xii. Define coast?

xiii. Why do we use maps?

xiv. What are oceans and continents?

xv. Is a map more useful than a globe? why?

xvi. What do you think that we can spot more stars in a countryside than we can in a city?

xvii. How many planets are in the solar system?

xviii. A thick layer of air all around the earth is known as?

xix. What makes the earth a suitable place for human beings?

xx. Why is the Earth called a blue planet?

(F) Learn and define these terms:

i. Constitution

ii. Parliament

iii. Territory

iv. Government

v. subcontinent

vi. Oasis

vii. Foothills

viii. Fertile

ix. Peninsula

x. Plateau

xi. Voyage

xii. Astronaut

xiii. Equator

xiv. Atlas

xv. celestial bodies

(G) Learn and write the following Hard words -

i. Plateau

ii. Perennial





# VASHISTH VATSALYA PUBLIC SCHOOL

An English Medium Co-Educational School  
PRAYAGRAJ

- |                       |                    |
|-----------------------|--------------------|
| iii. Fertile          | iv. Peninsula      |
| v. Barren             | vi. Coastal        |
| vii. Territories      | viii Government    |
| ix. Sub-continent     | x. Parliament      |
| xi. Mountains         | xii. Desert        |
| xiii. Region          | xiv. Kaniyakumari  |
| xv. Deccan.           | xvi. Mercury       |
| xvii. Jupiter.        | xviii. Neptune     |
| xix. Celestial bodies | xx. Horizon        |
| xxi. Astronaut        | xxii. Constitution |
| xxiii. Equator.       | xxiv. Meteorite    |
| xxv. Karnataka.       | xxvi. State        |
| xxvii. Central.       | xxviii. Religion   |
| xxix. Meridian.       | xxx. Latitude      |

(H)-Name them-

- Two water bodies that surround India.
- Two new Union Territories of India.
- Two southern states of India.
- Two eastern states of India.
- Two western states of India.
- Two northern states of India.

(I) Draw a flowchart of the physical features of India-

(J) Draw and colour-

- A Mountain
- A Parliament.
- Solar System.
- Globe.



# VASHISTH VATSALYA PUBLIC SCHOOL

An English Medium Co-Educational School  
PRAYAGRAJ

## HOME ASSIGNMENT 2023-24

### CLASS- 3

### SUBJECT- COMPUTER

*All questions are compulsory. Write these questions three times in your assignment copy and learn them.*

A) Learn and write these hard words two times in your assignment copy -

1. Publisher
2. Features
3. Outlook
4. Environment
5. Professional
6. Documents
7. Information
8. Access
9. Previous
10. Dynamically
11. Currently
12. Ribbon
13. Effects
14. Programs
15. Manipulate
16. Hardware
17. Function
18. Speaker
19. Processing
20. Microphone
21. Application
22. Animation



# VASHISTH VATSALYA PUBLIC SCHOOL

An English Medium Co-Educational School  
PRAYAGRAJ

23. Keyboard
24. Arithmetic
25. Emitting
26. Operating
27. Performing
28. Wallpaper
29. Desktop
30. Explorer

## (B) Fill in the blanks and learn them -

1. A grid of rows and column is known as \_\_\_\_\_.
2. \_\_\_\_\_ is used to manage emails, appointments and contacts.
3. \_\_\_\_\_ and \_\_\_\_\_ are two main parts of computer.
4. The processing of instructions is done by \_\_\_\_\_.
5. A computer works by following cycle \_\_\_\_\_.
6. Microphone is an example of \_\_\_\_\_ device.
7. A monitor is also known as \_\_\_\_\_.
8. A computer works by following \_\_\_\_\_ cycle.
9. Computer icon is available on the \_\_\_\_\_.
10. LCD stands for \_\_\_\_\_.

## (C) write the full form of the following and learn them:

1. ALU
2. CU
3. LCD
4. GIGO
5. CD
6. DVD
7. MU
8. LED
9. CPU





# VASHISTH VATSALYA PUBLIC SCHOOL

An English Medium Co-Educational School  
PRAYAGRAJ

## 10. CRT

### (D) Who am I?

1. I am used for dragging the items while working on the computer.
2. I am part of a computer which cannot be touched.
3. I am an output device that display pictures.
4. I am kept at desk.
5. I am small in size and can be carried easily in pocket. I am used for transferring data from one computer to another.
6. I am part of software which makes the computer run. \_\_\_\_\_
7. I am a part of computer which cannot be touched. \_\_\_\_\_
8. I am a type of software used for creating slides. \_\_\_\_\_

### (E) Define the terms and learn them -

- Q1. File Tab
- Q2. MS Word
- Q3. MS Power Point
- Q4. MS Access
5. Keyboard
6. Trackball
7. Tablet
8. Control unit
9. Recycle Bin
10. Desktop

### (F) Answer type questions and learn them.

1. Write a short note on Quick Access Toolbar.
2. What is MS Power Point.
3. Explain the difference between system software and application software.
4. What do you understand by IPO cycle? Give example.
5. How do you enter data and instruction into a computer?
6. What is software?



# VASHISTH VATSALYA PUBLIC SCHOOL

An English Medium Co-Educational School  
PRAYAGRAJ

7. Explain the difference between system and application software.
  8. What is a storage device? Give example.
  9. How do you enter data and instruction into a computer?
  10. Write any three characteristics of computer.
  11. Name different components of CPU.
  12. What are gadgets?
  13. Name any two input and output devices?
  14. Name the device used for sharing picture and having live chat with friends.
- ( G ) Look at the different types of monitor given below and write their names in full form.



(H) Draw and colour the diagram of -

- i. Desktop Computer
- ii. Laptop

**HOME ASSIGNMENT 2024-25**  
**CLASS-III**  
**SUBJECT- GENERAL KNOWLEDGE**

**LEARN AND SOLVE THE ASSIGNMENT THREE TIMES IN YOUR ASSIGNMENT COPY**

**A. Learn and write one word answer for the following questions-**

- 1) Where is the Mughal garden located?
- 2) What is the name of the famous lake in Kashmir?
- 3) Where is the gateway of India located?



# VASHISTH VATSALYA PUBLIC SCHOOL

An English Medium Co-Educational School  
PRAYAGRAJ

- 4) When is the children's day celebrated?
- 5) When is the independence day celebrated?

## B. Learn and write fill in the blanks-

- 1) Our national bird is.....
- 2) Our National anthem is.....
- 3) Our national animal is .....
- 4) Our national game is.....
- 5) Our national flower is.....

## C. Learn and write 'true' and 'false'-

- 1) Farmers day is celebrated on 15 August. (     )
- 2) Independence day is celebrated on 26 January.(     )
- 3) Gandhi Jayanti is celebrated on 2 October. (     )
- 4) Jahangir built the Mughal garden in memory of his wife.(     )
- 5) Tulip garden located in Kashmir is the largest garden in Asia. (     )

## D. learn and tick the correct answer-

- 1) I am called pink City.  
(a) Delhi (b) Kanpur (c) Jaipur (d) Allahabad
- 2) Teachers day is celebrated on-  
(a) 15 September (b) 10 October (c) 5 September (d) 10 November
- 3) Pongal is celebrated on -  
(a) Punjab (b) Uttar Pradesh (c) Tamilnadu (d) Delhi
- 4) I am the capital of India -  
(a) Lucknow (b) Delhi (c) Kanpur (d) Jaipur
- 5) The main festival of Punjab is -  
(a) gudi padwa (b) Pongal (c) Baisakhi (d) Holi

## E. Learn and draw the signs of these -

- 1) Zebra crossing
- 2) Christmas tree





# VASHISTH VATSALYA PUBLIC SCHOOL

An English Medium Co-Educational School

PRAYAGRAJ

3) Diwali festival

4) Traffic light

5) Footpath

**F. Name them-**

1. Who invented the Light Bulb?

2. Which planet in our solar system is known as the Red Planet?

3. What is the name of the biggest planet in our solar system?

4. Who invented the Telephone?

5. Who discovered Penicillin?

6. Which is the hottest planet in our solar system?

7. Which is the smallest planet in our solar system?

8. Which planet in our solar system is known as the Blue Planet?

9. Who invented the Printing Press?

10. Who successfully built and flew the world's first Aeroplane?

11. What is the name of the largest moon of Saturn?

12. Which planet in our Solar System takes the longest time to complete its revolution around the Sun?

13. Which planet in our Solar System has thousands of spectacular rings around?

14. What is French scientist Louis Pasteur famous for?

15. Which is the smallest bird in the world?

**G. Learn and write answer the following questions -**

1) What is the main language of Andhra Pradesh ?

2) How many independent countries are there in the world ?

3) Who was the chief guest at the republic day parade 2017 ?

4) The national Cancer awareness day is observed on which date in India ?

5) When was India's 75 republic day celebrated?

6) What is the Rajasthan also commonly called as?

7) Who is called as Google boy?

8) Which country is sometimes called as land of monuments?



# VASHISTH VATSALYA PUBLIC SCHOOL

An English Medium Co-Educational School  
PRAYAGRAJ

- 9) How many rings appear on the flag of Olympic games?
- 10) Which state is famous for its Madhubani painting?
- 11) Which is the smallest bird?
- 12) Which city is the capital of both Punjab and Haryana?
- 13) Who is the current chief minister of Uttar Pradesh?
- 14) Who was the first person to hoist the Indian National Flag?
- 15) What kind of animal is anaconda?
- 16) Which team was the winner of the first IPL tournament?
- 17) Write the name of national bird.
- 18) How many colors are there in rainbow? Write the name of all.
- 19) Where does the Prime Minister hoist the flag on 15 August?
- 20) Write the names of how many months are there in a year?

H. Draw and colour five 'living things and five non living things' on a chart paper.

## HOME ASSIGNMENT 2024-25

### CLASS- III

### DRAWING

1. Draw and Colour Sunflower and Joker (use Crayons)

Or

2. Draw and colour mango (use Crayons)

### Craft

Decorate and make Kachcha and Pakka House.